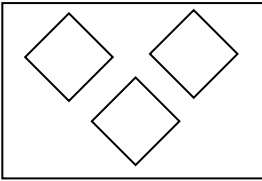


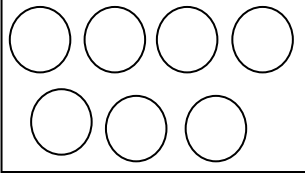
FREEDOM EXAMS  
1<sup>ST</sup> MID-TERM EXAMINATION 2022  
CLASS: KG 2  
SUBJECT: NUMERACY


NAME: .....

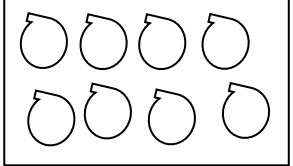
DATE: .....

How many objects are in the group? (16 marks)

1. 

2. 

3. 

4. 

Put in the correct symbol: <, >, = (16 marks)

5. 4 \_\_\_\_\_ 4

7. 20 \_\_\_\_\_ 18

6. 12 \_\_\_\_\_ 13

8. 6 \_\_\_\_\_ 11

Put the numbers in order from small to big. (8 marks)

9. 12, 8, 10      \_\_\_\_\_      \_\_\_\_\_      \_\_\_\_\_

10. 3, 8, 4      \_\_\_\_\_      \_\_\_\_\_      \_\_\_\_\_

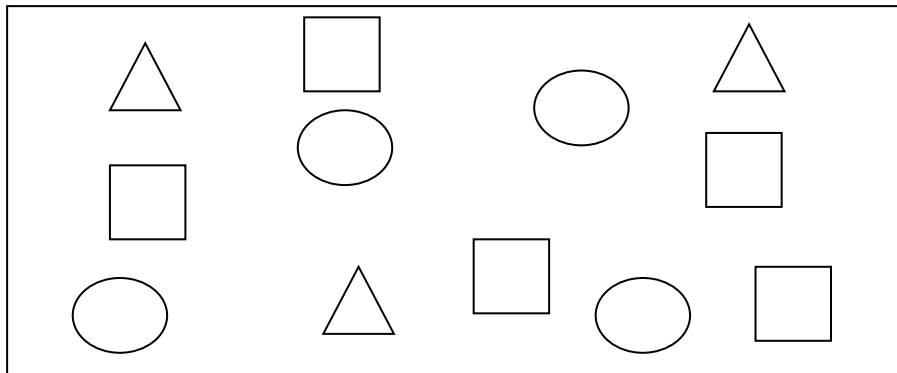
Write the missing numbers. (12 marks)


11. 12, \_\_\_\_\_, 14.


12. 15, 16, \_\_\_\_\_.


13. \_\_\_\_\_, 5, 6.

Classify the following shapes. Count each shape. (12 marks)



14. 

15. 

16. 

17. Which shape is one more than triangles? ..... (3 marks)

18. Which shape is one less than the circles? ..... (3 marks)

Complete the following. (20 marks)

19.  $3 + 3 = \square$

20.  $4 + 6 = \square$

21.  $3 + 5 = \square$

22.  $6 + 3 = \square$

Use **heavier than** or **lighter than** to compare the weight. (10 marks)



23. The mango is \_\_\_\_\_ the pineapple.



24. The soap is \_\_\_\_\_ the radio.