

# TRENDING-GHANA EXAMINATIONS CONSULTS

(INTELLIGENCE IS OUR HALLMARK)

## SUBJECT: RELIGIOUS & MORAL EDUCATION

NAME: \_\_\_\_\_

### Choose the Correct Answer

1. Only Christians celebrate religious festivals. a. True b. False
2. What do Christians call the day Jesus was killed?  
a. Good Friday b. Bad Friday c. Holy Friday
3. What festival do Christians celebrated to remember the day Jesus went to heaven.  
a. Ascension Day b. Pentecost day c. Heaven day
4. What festival do Muslims celebrated to remember the birth of Mohammed?  
a. Eid-ul-Fitr b. Eid-ul-Adha c. Maulid Nabi
5. What festival does the Efutu of Winneba celebrate?  
a. Aboakyere b. Danyibakaka v. Kundum
6. What festival do the Ahantas and Nzemas from the Western Region celebrate?  
a. Kundum b. Addae c. Aboakyere
7. People who have done very great things for a religion are \_\_\_\_\_  
a. Religious leaders b. Priests c. Worshippers
8. Who was the founder of the Christians religion?  
a. Jesus b. Mohammed c. Elijah
9. Who took care of Mohammed till he was 4 years?  
a. Mama Halima b. The uncle c. The grandmother
10. Who wanted to kill the baby Jesus?  
a. King Herod b. The three wise men c. The shepherds
11. Where did Jesus go when he was twelve years old?  
a. To the temple b. his relative c. Mecca
12. Muslims pray \_\_\_\_\_ times a day.  
a. Five b. six c. four
13. Christians give offering at worship. a. True b. False  
a. Traditionalists offer sacrifices. a. True b. False
14. Who do Muslims believe in and follow?  
a. Jesus b. Mohammed c. Khadijah
15. Who do Christians believe in and follow?  
a. Mohammed b. Moses c. Jesus
16. Plants and animals were made by human being. a. True b. False
17. We should eat \_\_\_\_\_ food.  
a. Clean b. rotten c. poisonous

18. Traditionalist worship the gods by going to \_\_\_\_\_  
a. Shrine    b. mosque    c. church
19. Religious helps us to be \_\_\_\_\_ to children.  
a. Good    b. lost    c. bad

**SECTION B**  
**ANSWER ALL QUESTIONS**

1. What is worship?

---

---

2. Mention three (3) different types of worships in Ghana.

- i.
- ii.
- iii.

3. Mention three (3) things Christians do to worship God

- i.
- ii.
- iii.

4. Who are your parents?

---

---

5. Mention 2 things our parents do for us.

- a.
- b.

## SUBJECT: NATURAL SCIENCE

NAME: \_\_\_\_\_

### SECTION A

#### Choose the Correct Answer

- \_\_\_\_\_ means keeping the surrounding clean.  
a. Sanitation    b. compound    c. Weeding
- Clean surrounding makes us \_\_\_\_\_.  
a. Sick    b. healthy    c. die
- One example of an erect plant is \_\_\_\_\_.  
a. Coconut plants    b. grass    b. yam
- Climbing plants are known as \_\_\_\_\_.  
a. Creepers    b. climbers    c. seed
- The only animal that have feathers are \_\_\_\_\_.  
a. Reptiles    b. insects    c. birds
- Water is good for drinking when it has \_\_\_\_\_.  
a. Smell    b. no smell    c. color
- Plants, animals and humans use air for \_\_\_\_\_.  
a. Breathing    b. eating    c. dancing
- We cannot see air but we \_\_\_\_\_ its presence.  
a. Feel    b. touch    c. beat
- Germs can cause many \_\_\_\_\_.  
a. Diseases    b. happiness    c. sad
- Sound is produced by objects that \_\_\_\_\_.  
a. Vibrate    b. rest    c. stand
- The longer a vibrating object, the \_\_\_\_\_ the sound it produces.  
a. Louder    b. lower    c. deep
- \_\_\_\_\_ is an artificial sound.  
a. Water fall    b. Radio    c. Thunder.
- \_\_\_\_\_ is a natural sound.  
a. Water fall    b. bell    c. Radio
- Mosquitoes grow in \_\_\_\_\_ surrounding.  
a. Clean    b. dirty    c. sick
- Which part of the plant is found in the soil?  
a. Leaves    b. Root    c. Stem
- Sunny weather mean \_\_\_\_\_.  
a. The wind blowing    b. the sun shining    c. it is raining
- The weather is always the same.    a. True    b. False  
a. Air support burning.    a. True    b. False

18. A battery gives \_\_\_\_\_ energy.

- a. Light
- b. electrical
- c. cold

19. After cleaning our compound, we must get rid of the \_\_\_\_\_ properly.

- a. Waste created
- b. germs
- c. malaria

**SECTION B**  
**ANSWER ALL QUESTIONS**

1. Name two tools we use to keep our compound clean.

- 1. \_\_\_\_\_
- 2. \_\_\_\_\_

2. List four (4) uses of water

- 1. \_\_\_\_\_
- 2. \_\_\_\_\_
- 3. \_\_\_\_\_
- 4. \_\_\_\_\_

3. What messages do the following materials carry?

<b><u>Materials</u></b>	<b><u>Message</u></b>
Alarm clock	
Guitar	
Thunder	
Siren	

4. Name the two sources of sound.

- i. \_\_\_\_\_
- ii. \_\_\_\_\_

## **SUBJECT: GHANAIAN LANGUAGE (FANTE)**

**NAME:** \_\_\_\_\_

### **SECTION A**

#### **Yiyi nsembisa nyinara ano**

#### **Twitwa mbea na nkurow edzin a ɔwɔ nentɔw mu ase**

1. Esi bɔkɔ Nkran ɔkyena.
2. Abam ye edwuma wɔ Oguaa.
3. Maame Amba .
4. Kofi Atya kɔr fiadze hɔ ndeda.
5. Simpa ye kurow keɛse.

#### **Twitwa ndzɛmba edzin a ɔwɔ nsentɔw yi mu ase**

1. Kofi na Efuwa pɛ paanoo.
2. Kube na mɛpɛ.
3. Buukuu kɔkɔw no ayew.
4. Esi tsena egua no do.
5. Twia tum dze pɛn kyerɛw.

#### **Twitwa nyɛɛ a ɔwɔ nsentɔw yi mu ase**

1. Araba kyew nam dabiara.
2. Kojo kɔ nsu dabiara.
3. Kwsei robɔ bɔɔl.
4. Muhun Esi ndede.
5. Ato foow dua no.

### **SECTION B**

#### **AKENKAN**

#### **APɔNKYE**

Iyi ye apɔnkye. Apɔnkye no dzin dze ɔpapa. N'enyi ye dzen. ɔwe habamon. Odzi fie edziban so. ɔwe boreɔdzehon, bankye na bayerhon. Se onyin a, me papa boku no ama ye awe.

Apɔnkye nam ye dɛw.

**Fa akyerɛwmba a ofi nkasafua no mu hyehye mu**

1. A \_\_\_ onk \_\_\_\_\_
2. Ha \_\_\_ am \_\_\_\_\_
3. B \_\_\_ nky \_\_\_\_\_
4. Boredze \_\_\_\_\_ n
5. D \_\_\_ w

**AKYERɛW DWUMADZI**

Okyena      Amba      bɔko      gua

1. \_\_\_\_\_
2. \_\_\_\_\_
3. \_\_\_\_\_
4. \_\_\_\_\_
5. \_\_\_\_\_

## SUBJECT: ENGLISH LANGUAGE

NAME \_\_\_\_\_

### SECTION A

### GRAMMAR

#### Underline the preposition in the sentences

1. The box is under the bed.
2. The man is in front of the car.
3. The boy is beside the chair.
4. The girls are in the kitchen.
5. The frog jumped into the stream.

#### Underline the correct responses

1. Are the girls in class?  
a. Yes, they are                      b. No they aren't
2. Is your mother a teacher?  
a. No, she isn't                      b. Yes she is
3. Do you pray always?  
a. No I don't                      b. Yes , I do
4. Has Esi spent the money?  
a. Yes, she has                      b. No, she hasn't
5. Did you iron your school uniforms?  
a. Yes , I did                      b. No I didn't

#### Fill in each blank space with the simple past tense of the verb

1. The two boys \_\_\_\_\_ the bicycle.  
a. Rode                      b. are riding
  2. Mum \_\_\_\_\_ the food herself.  
a. Prepares                      b. prepared
  3. Kwasi \_\_\_\_\_ a serious pupil.  
a. Is                      b. was
  4. Naana \_\_\_\_\_ the door.  
a. Is opening                      b. opened
- I \_\_\_\_\_ a phone call.  
a. Had                      b. will have

#### Fill in the gap with a suitable adjective and underline it

1. Give me my \_\_\_\_\_ pen.  
a. Blue                      b. fat
2. That \_\_\_\_\_ boy comes from a village.

- a. Tall                      b. long
3. My \_\_\_\_\_ friend has travelled.
- a. Young              b. best
3. On one \_\_\_\_\_ day, I decided to go out.
- a. Sunny              b. Windy
4. Your \_\_\_\_\_ brother has to be taken to the hospital.
- a. Healthy              b. sick.

**SECTION B**  
**READING AND COMPREHENSION**

**READ THE PASSAGE AND ANSWER CAREFULLY**

It is 10:30 am. It is time for P.E. Children are not at the playground. They are class 2 A and 2 B pupils. They have P.E. at the same time. Mr Armah is there with them. He is their P.E teacher. Now, they are doing more exercise.

After that some boys will play football. Other boys will play handball. Some girls will play netball. Others will play ampe and hopscotch. Two girls will play skipping and four children will be on the swing. They will go back to their classroom at 11:10 am. It is good to do exercise.

**ANSWER THESE QUESTIONS**

1. What is the time? \_\_\_\_\_
2. It is time for what? \_\_\_\_\_
3. Where are the children now? \_\_\_\_\_
4. Which two classes are there? \_\_\_\_\_
5. Who is their P.E teacher? \_\_\_\_\_

**SECTION C**  
**WRITING AND COMPOSITION**

**Copy the sentence 5 times**

we                  are                  good                  children.

1. \_\_\_\_\_
2. \_\_\_\_\_
3. \_\_\_\_\_
4. \_\_\_\_\_
5. \_\_\_\_\_

**MY BEST FRIEND**

1. The name of my best friend is \_\_\_\_\_
2. She /He is \_\_\_\_\_ years old.



3. She /He is \_\_\_\_\_ in complexion.
4. She /He come from \_\_\_\_\_.
5. But stays at \_\_\_\_\_.
6. She / He attends school at \_\_\_\_\_
7. She / He is in stage \_\_\_\_\_
8. The food she /he like best is \_\_\_\_\_
9. The game she / he best is \_\_\_\_\_
10. I like my friend because she / he is a \_\_\_\_\_ friend.

**LISTENING AND SPEAKING**

**Join the part of words under "A" with those under "B" to form correct words**

A	B
Child	me
Classr	is
Gir	oom
Ti	ren

**SUBJECT: MATHEMATICS.**

**NAME:** \_\_\_\_\_

**SECTION A**

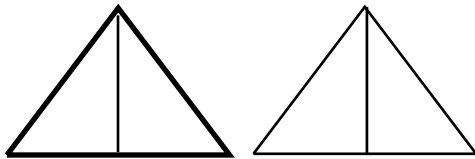
Choose the Correct Answer

1.  $5 + 6 =$   a. 10      b. 11      c. 9
2.  $11 + 8 =$   a. 18      b. 19      c. 20
3.  $38 - 8 =$   a. 37      b. 30      c. 46
4.  $57 - 10 =$   a. 47      b. 67      c. 37
5.  $12 \times 5 =$   a. 50      b. 60      c. 70
6.  $3 \times 0 =$   a. 0      b. 3      c. 1
7.  $8 \div 4 =$   a. 3      b. 5      c. 2
8.  $40 \div 4 =$   a. 10      b. 12      c. 15
9.  $50 - 30 =$   a. 20      b. 30      c. 10

10. 6 hundred 7 ones =  How many tens? a. 67      b. 76      c. 60

11. 3 hundred 3 ones =  a. 34      b. 33      c. 35

12. How many halves



- a. 4 halves      b. 3 halves      c. 5 halves



- a. 7 halves      b. 3 halves      c. 5 halves

14. What is the difference between 49 and 27? a. 22      b. 24      c. 32

15. Find the sum of 18 and 64. a. 84      b. 82      c. 81

16. Add 25 to 34

a. 80

b. 84

c. 59

17. What is the product of 5 and 5

a. 25

b. 35

c. 45

18.  $6 \times 1 =$  \_\_\_\_\_

a. 6

b. 1

c. 0

Find the missing addend.

19.  $(12 + 3) + 5 =$  \_\_\_\_\_  $(3 + 5)$

a. 3

b. 5

c. 12

20.  $(6 + \text{_____}) + 5 = (6 + 13) + 5$

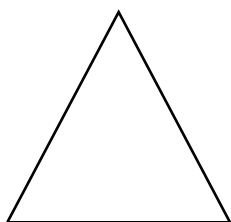
a. 6

b. 13


c. 5

**SECTION B**


**ANSWER ALL QUESTIONS**



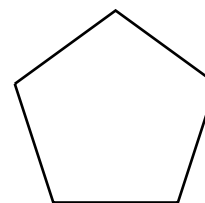
Triangle



Square



Rectangle



Pentagon

**Complete the table below.**

1. How many sides and lines segments has each of the plane figure above?

Name of plane figure	No. of sides	No. of line segment
Triangle		
Square		
Rectangle		
Pentagon		

$$\begin{array}{r}
 2. \quad 1 \ 2 \\
 \times \quad 2 \\
 \hline \\
 \hline
 \end{array}$$

$$\begin{array}{r}
 3. \quad 1 \ 4 \\
 \times \quad 3 \\
 \hline \\
 \hline
 \end{array}$$

$$\begin{array}{r}
 4. \quad 1 \ 0 \\
 \times \quad 2 \\
 \hline \\
 \hline
 \end{array}$$

**Do the following additions and subtractions**

5. 
$$\begin{array}{r} 28 \\ 31 \\ +12 \\ \hline \\ \hline \end{array}$$

6. 
$$\begin{array}{r} 72 \\ 13 \\ +25 \\ \hline \\ \hline \end{array}$$

7. 
$$\begin{array}{r} 33 \\ -12 \\ \hline \\ \hline \end{array}$$

8. 
$$\begin{array}{r} 68 \\ -39 \\ \hline \\ \hline \end{array}$$

## **SUBJECT: COMPUTING**

**NAME:** \_\_\_\_\_

1. Places we obtain our information are called.....?  
a. Source of information      b. Places of information      c. documentation      d. Ghana web
2. There are mainly 3 sources of information.  
a. True      b. False
3. Which one of these is not a secondary source of information?  
a. Text books      b. Magazines      c. Census      d. Dictionaries
4. Information can be acquired through telephone. True / False
5. Information cannot be acquired through radio.  
a. True      b. False
6. Which of these is not part of the computer?  
a. mouse      b. spanner      c. monitor
7. Which one of these not part of a computer?  
a. Power supply      b. System unit      c. Nail
8. Keyboard can be called.....?  
a. True      b. False
9. The mouse is an input device?  
a. True      b. False
10. Headphones can help you listen to music or any sound from a computer.  
a. True      b. False

### **Essay**

- 1.a What is information?  
b. Mention 4 sources of information.
- 2a. Mention any 3 technologies used in communication.  
b. Mention 3 parts of a computer.

### **SECTION C**

Draw the following part of the computer

1. Monitor
2. Mouse
3. Keyboard

**SUBJECT: CREATIVE ARTS.**

Make a sketch of how you want the arrangement of the exhibition room to look like.

Using shapes make your own pattern.

Trace and color the picture below.

